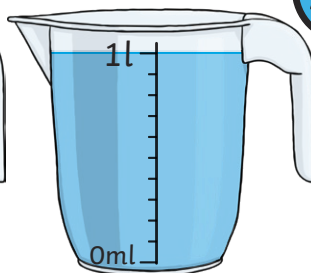
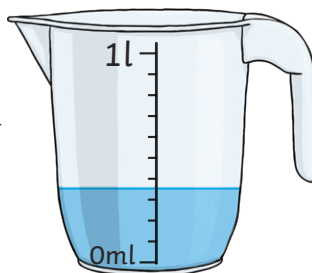




1)

a) What is each interval worth on the container?

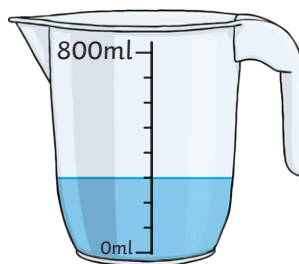
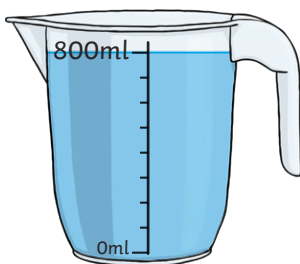
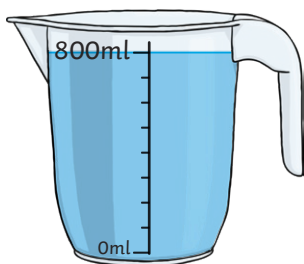
c) What is the volume of the liquid in the part-filled container?



b) What is the capacity of one container?

d) What is the total volume of liquid?
_____ l and _____ ml

2)



a) What is each interval worth on the container?

b) What is the capacity of one container?

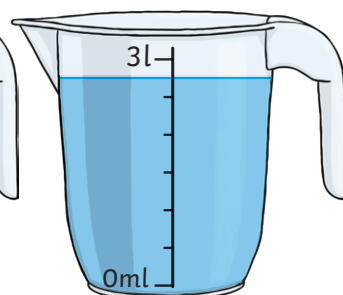
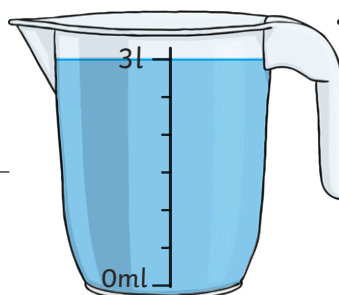
c) What is the volume of the liquid in the part-filled container?

d) What is the total volume of liquid?
_____ l and _____ ml

3)

a) What is each interval worth on the container?

c) What is the volume of the liquid in the part-filled container?



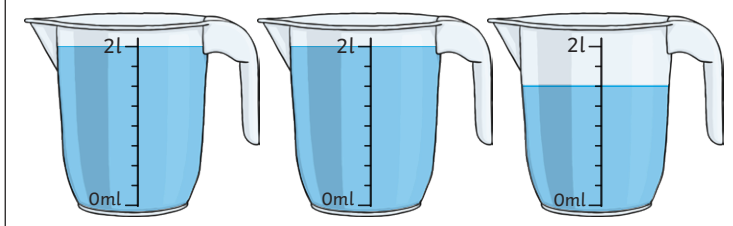
b) What is the capacity of one container?

d) What is the total volume of liquid?
_____ l and _____ ml


Eva and Joe have been using jugs of water to fill a bucket.



Eva says, "I used this many jugs."



Joe says, "I used this many jugs."




1) Who put more water into the bucket? Explain your answer.

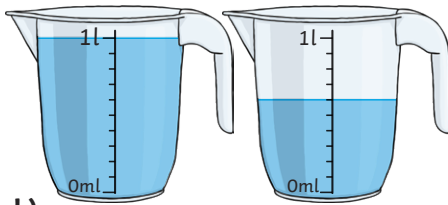
2) Joe says that the volume of liquid in this bucket is 8 litres 600ml. Eva thinks it is less than that. Who is correct? Explain your answer.



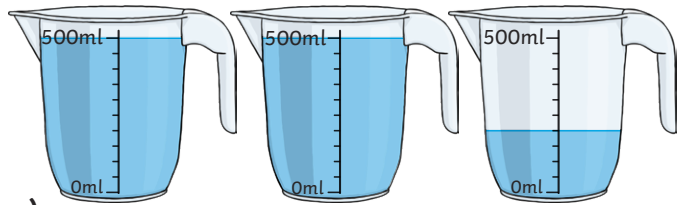
1) Arif has been measuring the capacity of some containers but has lost the labels reminding him how much water filled each container. Fill in the missing information.



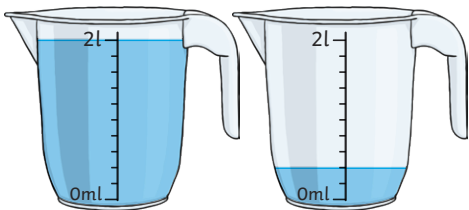
a) The volume of liquid is _____ l and _____ ml.



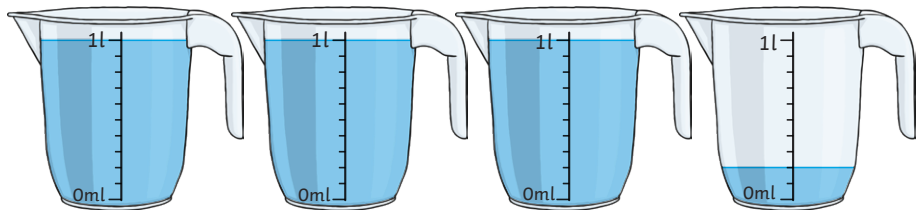
b) The volume of liquid is _____ l and _____ ml.



c) The volume of liquid is _____ l and _____ ml.



d) The volume of liquid is _____ l and _____ ml.



e) The volume of liquid is _____ l and _____ ml.

2) Use the clues to match the above capacities to the correct containers listed below.

bottle	_____ l and _____ ml
bucket	_____ l and _____ ml
4 cups	_____ l and _____ ml
glass	_____ l and _____ ml
pan	_____ l and _____ ml

The glass has a capacity of less than $\frac{3}{4}$ of a litre.
One cup has the same capacity as one glass.
The capacity of the pan is half the capacity of the bucket.

3) What clue could you give to describe the capacity of the bottle?
