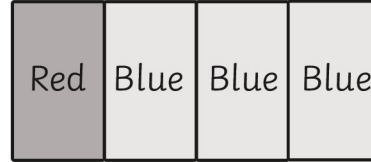


Adding Fractions

Name..... Date.....

Colour in the correct number of boxes and write the answer to the fraction sums. Example:

a) $\frac{1}{4} + \frac{3}{4} = \frac{4}{4}$
Red Blue



b) $\frac{1}{4} + \frac{2}{4} = \frac{\quad}{4}$
Red Blue



c) $\frac{2}{5} + \frac{1}{5} = \frac{\quad}{5}$
Red Blue



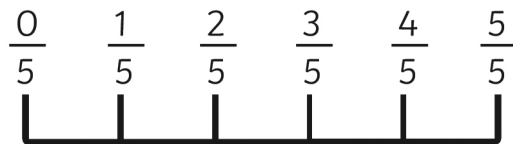
d) $\frac{1}{3} + \frac{2}{3} = \frac{\quad}{3}$
Red Blue



Use the fraction numberline to find the answer to the fraction sums.

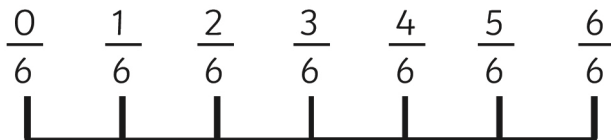
e) $\frac{1}{5} + \frac{3}{5} =$

f) $\frac{1}{5} + \frac{4}{5} =$



g) $\frac{2}{6} + \frac{3}{6} =$

h) $\frac{1}{6} + \frac{4}{6} =$



Adding Fractions

Name..... Date.....

Work these sums out:

a)

1) $\frac{3}{7} + \frac{2}{7} =$

2) $\frac{2}{5} + \frac{2}{5} =$

3) $\frac{1}{5} + \frac{3}{5} =$

4) $\frac{2}{6} + \frac{3}{6} =$

5) $\frac{4}{8} + \frac{2}{8} =$

6) $\frac{4}{7} + \frac{3}{7} =$

7) $\frac{6}{9} + \frac{2}{9} =$

8) $\frac{5}{8} + \frac{2}{8} =$

9) $\frac{7}{10} + \frac{2}{10} =$

10) $\frac{5}{12} + \frac{6}{12} =$

11) $\frac{4}{11} + \frac{5}{11} =$

12) $\frac{5}{15} + \frac{8}{15} =$

b)

1) $\frac{5}{9} + \frac{4}{9} =$

2) $\frac{5}{8} + \frac{2}{8} =$

3) $\frac{3}{9} + \frac{5}{9} =$

4) $\frac{5}{12} + \frac{6}{12} =$

5) $\frac{8}{14} + \frac{5}{14} =$

6) $\frac{7}{12} + \frac{4}{12} =$

7) $\frac{9}{15} + \frac{4}{15} =$

8) $\frac{7}{16} + \frac{8}{16} =$

9) $\frac{3}{15} + \frac{5}{15} + \frac{4}{15} =$

10) $\frac{3}{11} + \frac{4}{11} + \frac{2}{11} =$

11) $\frac{3}{16} + \frac{7}{16} + \frac{5}{16} =$

Adding Fractions - Answers

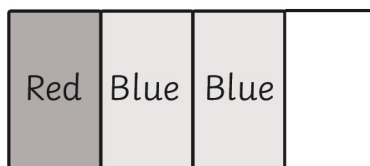
Name..... Date.....

Colour in the correct number of boxes and write the answer to the fraction sums. Example:

a) $\frac{1}{4} + \frac{3}{4} = \frac{4}{4}$
 Red Blue



b) $\frac{1}{4} + \frac{2}{4} = \frac{3}{4}$
 Red Blue



c) $\frac{2}{5} + \frac{1}{5} = \frac{3}{5}$
 Red Blue



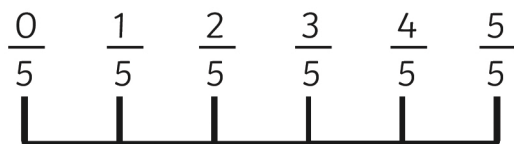
d) $\frac{1}{3} + \frac{2}{3} = \frac{3}{3}$
 Red Blue



Use the fraction numberline to find the answer to the fraction sums.

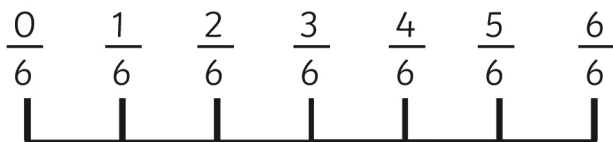
e) $\frac{1}{5} + \frac{3}{5} = \frac{4}{5}$

f) $\frac{1}{5} + \frac{4}{5} = \frac{5}{5}$



g) $\frac{2}{6} + \frac{3}{6} = \frac{5}{6}$

h) $\frac{1}{6} + \frac{4}{6} = \frac{5}{6}$



Adding Fractions - Answers

Name..... Date.....

Work these sums out:

a)

$$1) \frac{3}{7} + \frac{2}{7} = \frac{5}{7} \quad 2) \frac{2}{5} + \frac{2}{5} = \frac{4}{5} \quad 3) \frac{1}{5} + \frac{3}{5} = \frac{4}{5}$$

$$4) \frac{2}{6} + \frac{3}{6} = \frac{5}{6} \quad 5) \frac{4}{8} + \frac{2}{8} = \frac{6}{8} \quad 6) \frac{4}{7} + \frac{3}{7} = \frac{7}{7}$$

$$7) \frac{6}{9} + \frac{2}{9} = \frac{8}{9} \quad 8) \frac{5}{8} + \frac{2}{8} = \frac{7}{8} \quad 9) \frac{7}{10} + \frac{2}{10} = \frac{9}{10}$$

$$10) \frac{5}{12} + \frac{6}{12} = \frac{11}{12} \quad 11) \frac{4}{11} + \frac{5}{11} = \frac{9}{11} \quad 12) \frac{5}{15} + \frac{8}{15} = \frac{13}{15}$$

b)

$$1) \frac{5}{9} + \frac{4}{9} = \frac{9}{9} \quad 2) \frac{5}{8} + \frac{2}{8} = \frac{7}{8} \quad 3) \frac{3}{9} + \frac{5}{9} = \frac{8}{9}$$

$$4) \frac{5}{12} + \frac{6}{12} = \frac{11}{12} \quad 5) \frac{8}{14} + \frac{5}{14} = \frac{13}{14} \quad 6) \frac{7}{12} + \frac{4}{12} = \frac{11}{12}$$

$$7) \frac{9}{15} + \frac{4}{15} = \frac{13}{15} \quad 8) \frac{7}{16} + \frac{8}{16} = \frac{15}{16} \quad 9) \frac{3}{15} + \frac{5}{15} + \frac{4}{15} = \frac{9}{15}$$

$$10) \frac{3}{11} + \frac{4}{11} + \frac{2}{11} = \frac{9}{11} \quad 11) \frac{3}{16} + \frac{7}{16} + \frac{5}{16} = \frac{15}{16}$$